






<p>Date: 26/02/2021</p> 	<p>WALT: To draw a pictogram using information given. GD: To independently draw a pictogram.</p> <p><a href="https://whiterosemaths.com/homelearning/year-3/spring-week-5-statistics/">https://whiterosemaths.com/homelearning/year-3/spring-week-5-statistics/</a></p>	<p><b>Self-assessment</b></p> <p>Fluency: Reasoning/PS:</p>
---	---	---


## Reasoning and Problem Solving

Create a pictogram to show who was born in what season in your class.

Use what you know about pictograms to help you.

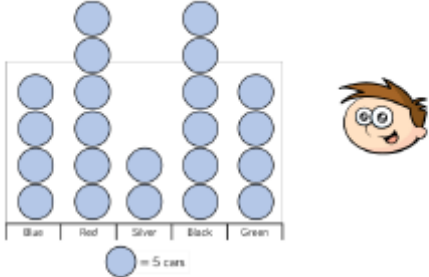

Here is an example.

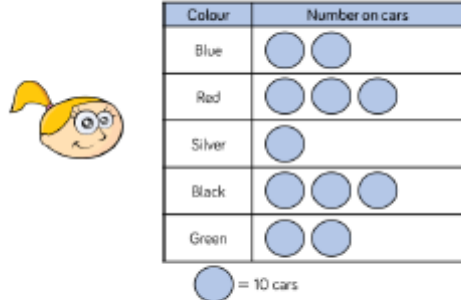

																			
Spring	Summer	Autumn	Winter																
<table border="1" style="width: 100%; height: 40px;"> <tr><td style="width: 25%;"></td><td style="width: 25%;"></td></tr> <tr><td style="width: 25%;"></td><td style="width: 25%;"></td></tr> </table>					<table border="1" style="width: 100%; height: 40px;"> <tr><td style="width: 25%;"></td><td style="width: 25%;"></td></tr> <tr><td style="width: 25%;"></td><td style="width: 25%;"></td></tr> </table>					<table border="1" style="width: 100%; height: 40px;"> <tr><td style="width: 25%;"></td><td style="width: 25%;"></td></tr> <tr><td style="width: 25%;"></td><td style="width: 25%;"></td></tr> </table>					<table border="1" style="width: 100%; height: 40px;"> <tr><td style="width: 25%;"></td><td style="width: 25%;"></td></tr> <tr><td style="width: 25%;"></td><td style="width: 25%;"></td></tr> </table>				

**Key**  
 = 2 children

Season children were in
Spring – 8
Summer – 9
Autumn – 12
Winter - 1

Teddy and Eva both draw a pictogram to show how many cars they counted driving past their school.

**What is the same? What is different?  
Whose pictogram do you prefer? Why?**